

# Leçon 4

## Quelle heure est-il?


Draw the hands for each time then write two of your own and draw hands in



Il est sept heures




Il est dix heures et demie




Il est neuf heures et quart





Il est une heure



Il est trois heures  
et quart



Il est quatre heures  
et demie



Il est.....heure/s

